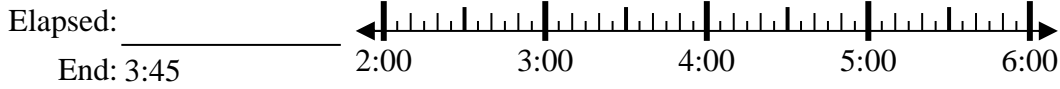




Solve each problem.

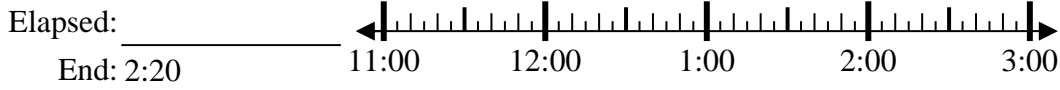
Answers

1) Start: 2:00



1. _____

2) Start: 11:35



2. _____

3) Start: 9:00



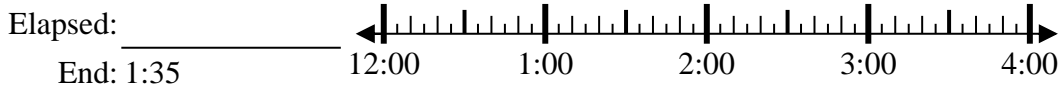
3. _____

4) Start: 11:45



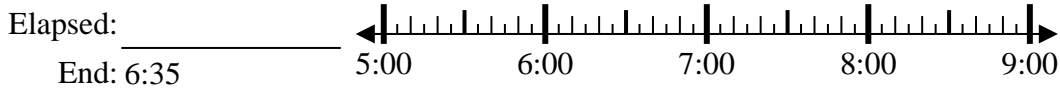
4. _____

5) Start: 12:20



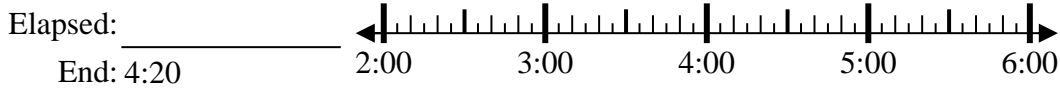
5. _____

6) Start: 5:25



6. _____

7) Start: 2:35



7. _____

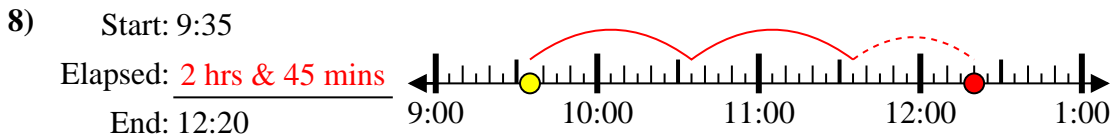
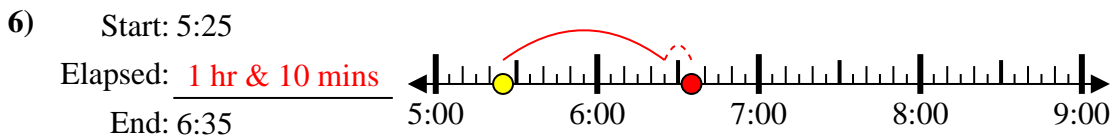
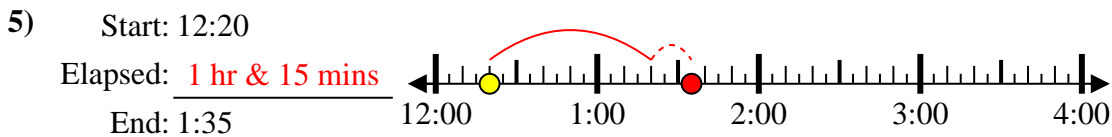
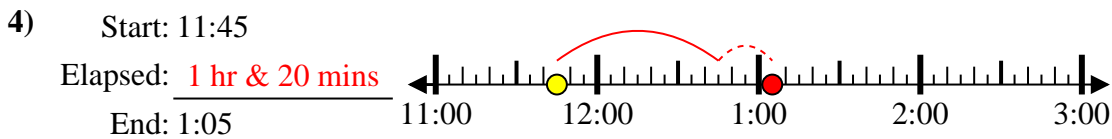
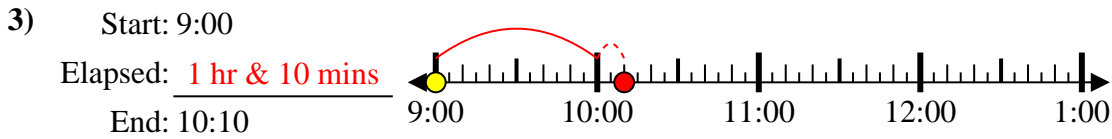
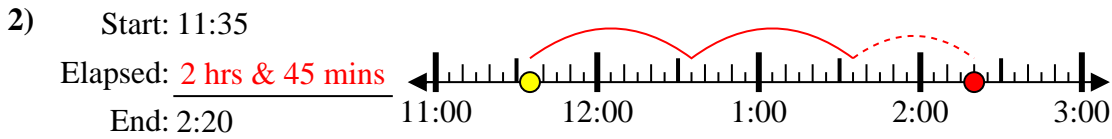
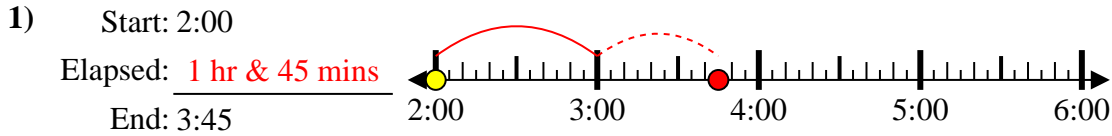
8) Start: 9:35



8. _____



Solve each problem.



Answers

1. 1 hr & 45 mins
2. 2 hrs & 45 mins
3. 1 hr & 10 mins
4. 1 hr & 20 mins
5. 1 hr & 15 mins
6. 1 hr & 10 mins
7. 1 hr & 45 mins
8. 2 hrs & 45 mins